

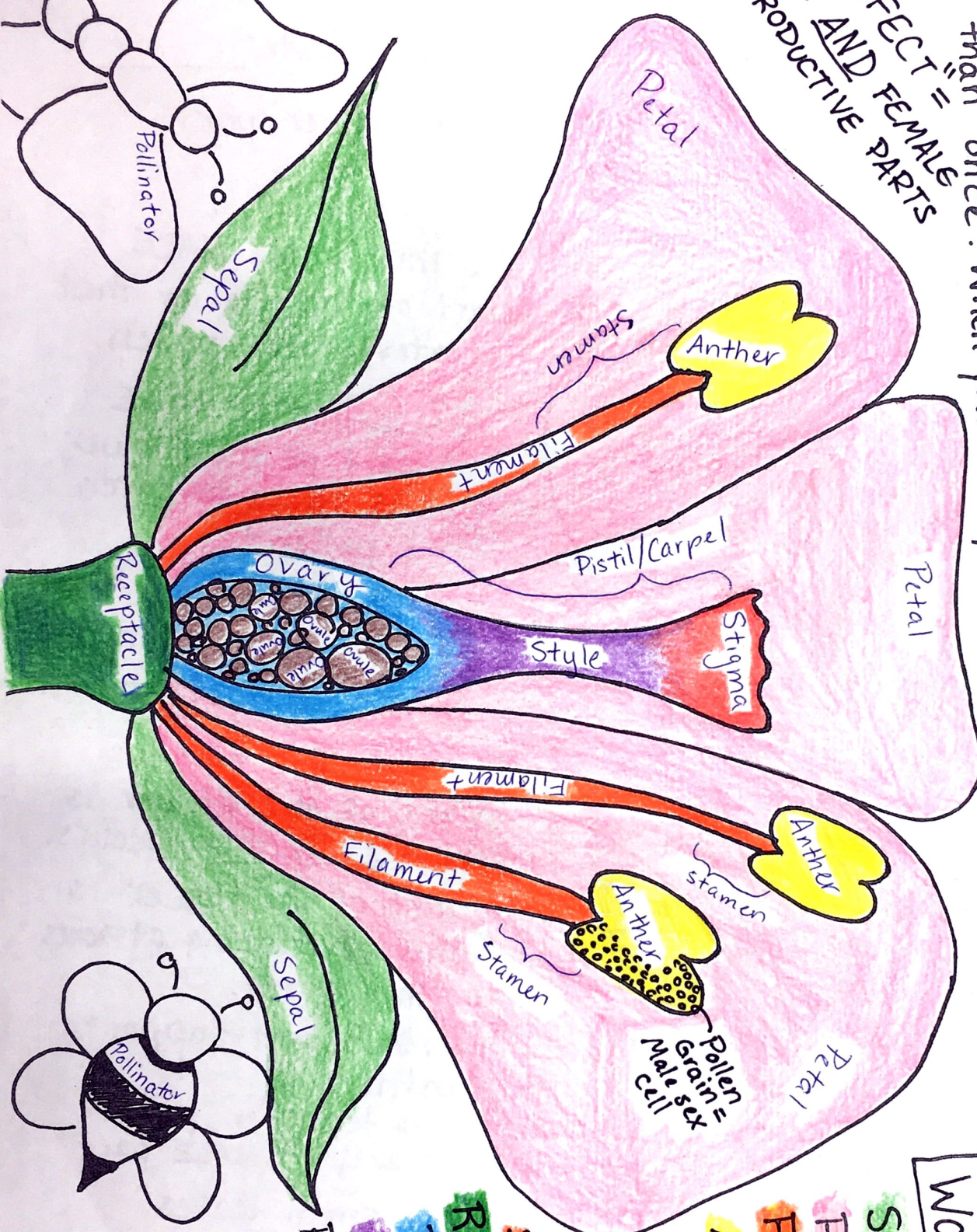
Name: Kery

Core: _____

Date: _____


Directions: IN the flower, write the name of the flower part. If the part appears more than once in the picture, write the name more than once! When you finish, color the picture!

PERFECT =
MALE AND FEMALE
REPRODUCTIVE PARTS



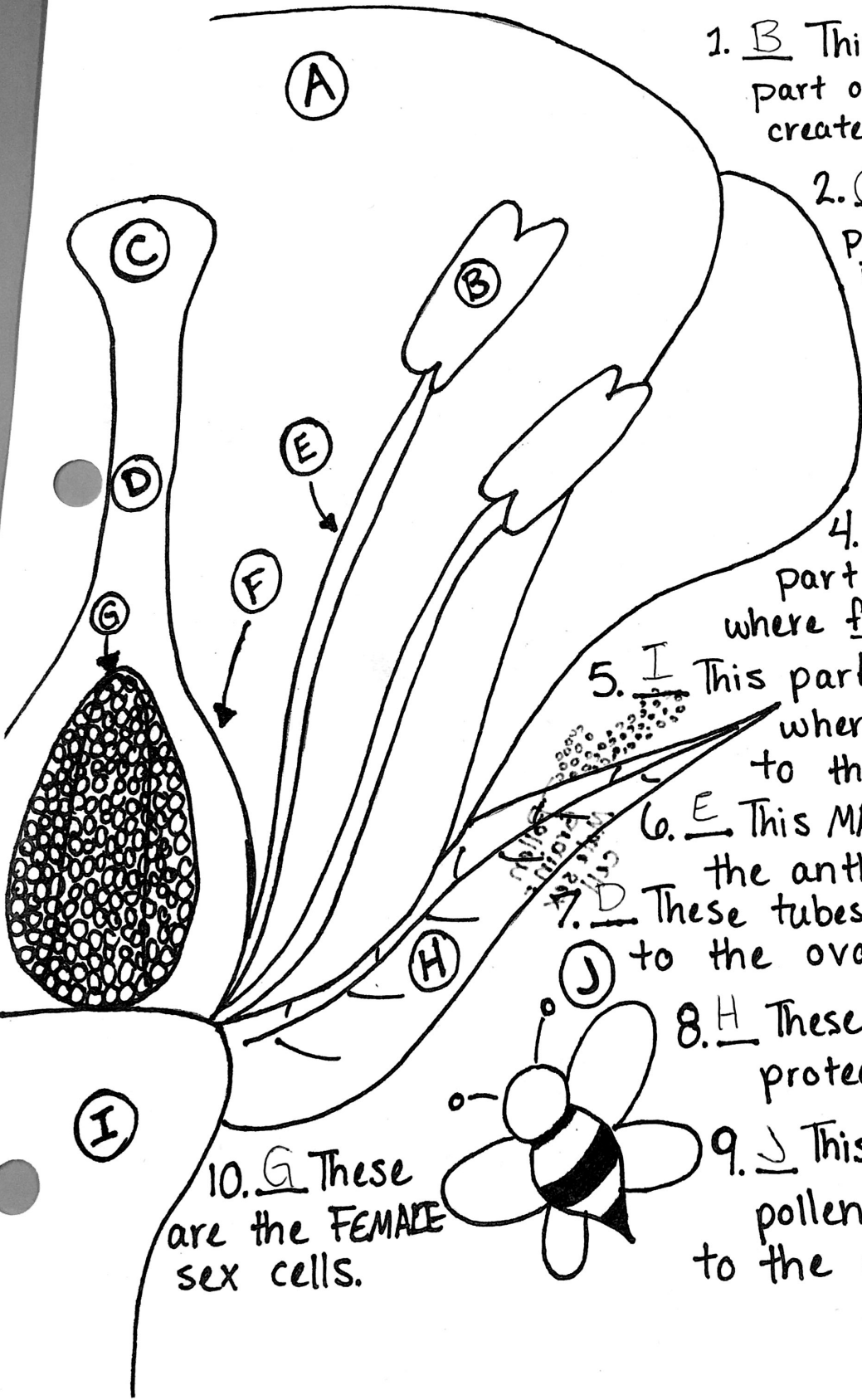
WORD BANK

- SEPAL (2)
- PETAL (3)
- FILAMENT (3)
- ANTHER (3)
- STIGMA
- OVARY
- OVULE (Many)
- STAMEN (3)
- RECEPTACLE
- PISTIL/Carpel
- STYLE
- POLLINATOR (2)



Name: K. G. S. Core: _____ Date: _____

Directions: Match the picture of the flower part to its correct function.



1. B This is the MALE part of the flower that creates/stores pollen.
2. C This FEMALE part of the flower is sticky to catch pollen.
3. A This part's brightly colored to attract pollinators.
4. F This FEMALE part of the flower is where fertilization occurs.
5. I This part of the flower is where everything attaches to the stem.
6. E This MALE part supports the anther.
7. D These tubes transfer pollen to the ovary - FEMALE part
8. H These small leaves protect the flower bud.
9. J This helps transfer pollen from the stamen to the pistil.

10. G These are the FEMALE sex cells.